


Focal Mechanisms

Given the following focal mechanisms, provide the requested information. Thanks to Vince Cronin at Baylor University for providing a data from a similar activity.



Type of faults (including sense of slip):


Strike & Dip of Nodal Planes

Plane 1: Strike _____ Dip _____

Plane 2: Strike _____ Dip _____

Map of one possible fault

Map of other possible fault



Type of faults (including sense of slip):

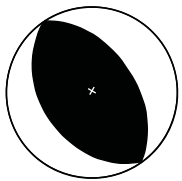
Strike & Dip of Nodal Planes

Plane 1: Strike _____ Dip _____

Plane 2: Strike _____ Dip _____

Map of one possible fault

Map of other possible fault



Type of faults (including sense of slip):


Strike & Dip of Nodal Planes

Plane 1: Strike _____ Dip _____

Plane 2: Strike _____ Dip _____

Map of one possible fault

Map of other possible fault



Type of faults (including sense of slip):


Strike & Dip of Nodal Planes

Plane 1: Strike _____ Dip _____

Plane 2: Strike _____ Dip _____

Map of one possible fault

Map of other possible fault



Type of faults (including sense of slip):

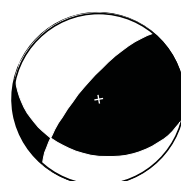
Strike & Dip of Nodal Planes

Plane 1: Strike _____ Dip _____

Plane 2: Strike _____ Dip _____

Map of one possible fault

Map of other possible fault



Type of faults (including sense of slip):

Strike & Dip of Nodal Planes

Plane 1: Strike _____ Dip _____

Plane 2: Strike _____ Dip _____

Map of one possible fault

Map of other possible fault